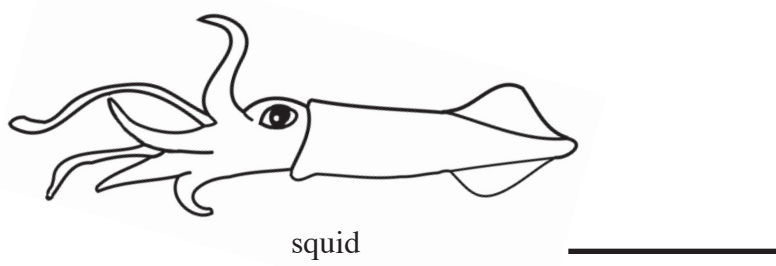

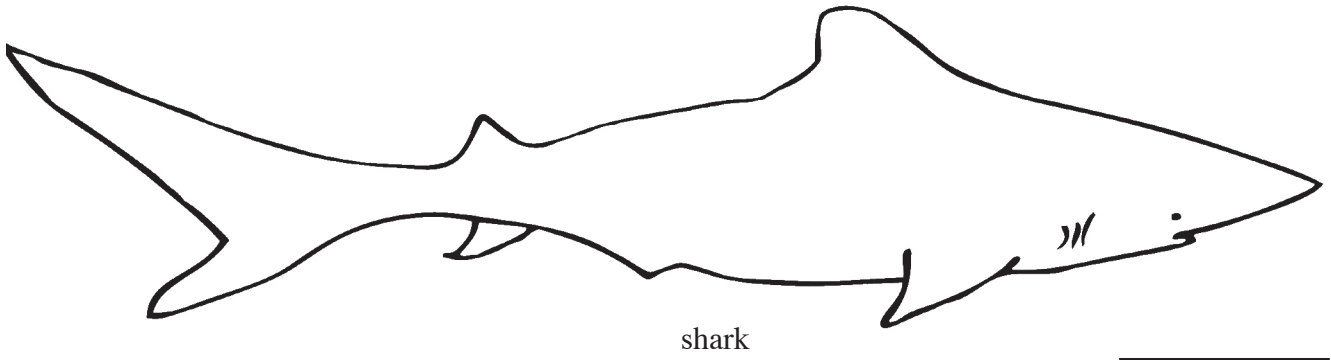


HOW LONG IS THIS FISH?

Directions: Cut out the whole strip of small fish and use it to measure each of these bigger fishes. Then answer the questions below.



Circle the right answer.

1. Which fish is longest? squid grouper eel
2. Which fish is shortest? eel shark squid
3. How many fish longer is the shark than the squid? _____
4. How many fish longer is the eel than the grouper? _____

